

Geometry

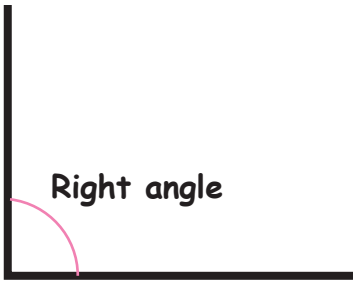
Name : Class :

Score :

Which characteristics match these angles ?

Characteristics

1)



360°

2)



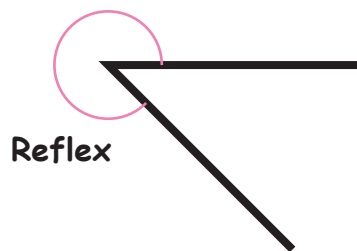
90°

3)



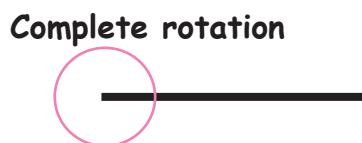
$> 180^{\circ}$

4)



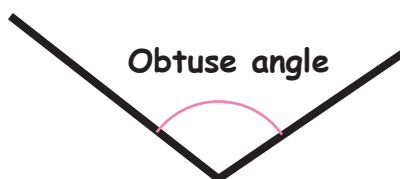
$> 90^{\circ} < 180^{\circ}$

5)



180°

6)



$< 90^{\circ}$

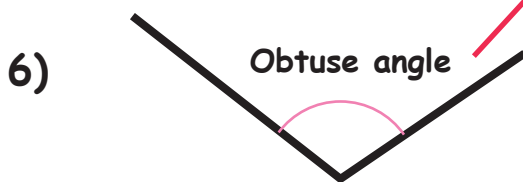
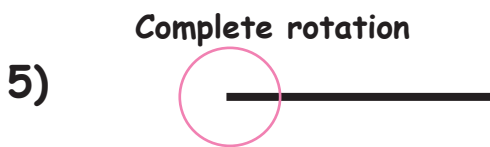
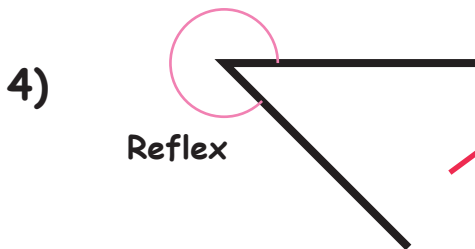
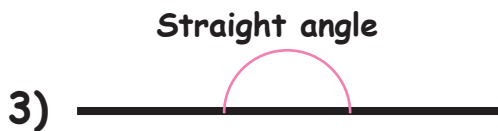
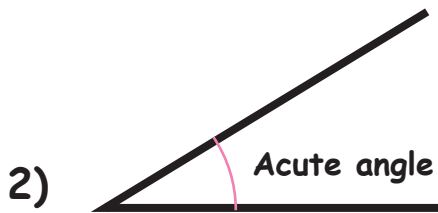
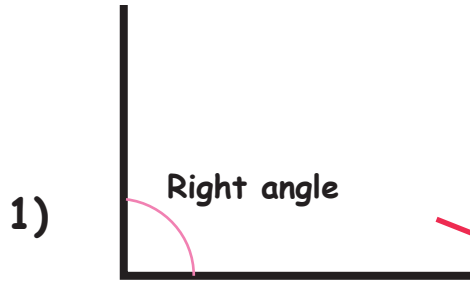
Geometry

Name : Class :

Score :

Which characteristics match these angles ?

Characteristics



360°
90°
$>180^{\circ}$
$>90^{\circ} <180^{\circ}$
180°
$<90^{\circ}$